

STATE OLYMPIAD COMBINED TEST-2024

ENGLISH VERSION



Question Paper Cum Answer Sheet

Full Marks:-

100 Marks

**CLASS
1**

Time:-

2 Hrs.

DATE:-...../...../ 2024

Name of Student:-.....

Class:- **Roll No:-**

Name of Centre:-.....

-:Instructions:-

- Write Roll Number clearly.
- Read the question paper carefully and answer.
- Give single (\checkmark) mark on the correct answer only.
- Use only blue or black ball pen.

Subject	Marks Obtained
English	
Gen. Science	
Mathematics	
TOTAL	

Signature of Student

Signature of Examiner/s

Signature of Invigilator/s



ENGLISH - 40

(Grammar-20)

1) Tick the correct option to complete the following sentences:

1X8=8

i) Plural form of



'Mouse' is –

- a) Mouses [] b) Mice [] c) Mices [] d) None of these []

ii) The verb after 'they' will be-

- a) is [] b) am [] c) being [] d) are []

iii) 'He is a boy.' – The underlined word in the sentence is a –

- a) Noun [] b) Adverb [] c) Pronoun [] d) Adjective []

iv) The past form of the verb 'see' is –

- a) Seen [] b) Saw [] c) seed [] d) None of these []

v) The feminine gender of the word



is –

- a) Mam [] b) Madam [] c) Mistress [] d) None []

vi) 'It is _____ university'. 'the article in the blank will be –

- a) a [] b) an [] c) the [] d) None []

vii) 'I shall go to school'. The sentence is written in –

- a) Present Tense [] b) Past Tense [] c) Perfect Tense [] d) Future Tense []

viii) 'Look _____ the



The preposition in the blank will be -

- a) at [] b) by [] c) to [] d) None []

2). Fill in the blanks with the correct verbs:

1x4 = 4

i) Neha _____ absent **yesterday**.

ii) All the students _____ present **today**.

iii) Bubun **never** _____ (**talk**) lie.

iv) Tomorrow _____ my birthday.

3. Do as directed:

2x4=8

i) _____ kind of Noun ?



Ans. _____.

ii) What type of sentence is 'open the door' ?

Ans:- _____

iii) Put punctuation marks to the sentence & rewrite- 'rice and pulse sell very cheap'

Ans:- _____

iv) Write an example _____ of verb .



Ans: _____

(Vocabulary-10)

4) A. Choose the correct Answer :-

1x4=4

i) TI _____



The picture is -

(a)potato

(b) papaiya

(c)gourd

(d) brinjal

(ii) The fruit that quench thirst is -

(a)banana

(b)terrics

(c)water melon

(d)plum

(iii) To carry water _____ is used .

(a)bucket

(b)broom

(c)dish

(d)bowl

(iv) The animal called 'The Ship of desert' is .

(a)Ship

(b)Dog

(c)Camel

(d)Horse

B. Fill in the blanks with the correct words :-

1x2 =2

(i) ERTACHE : _____

(ii) EEDR : _____

C. Do as directed

2x2=4

(i) The babies of 'pig' is called ?

Ans. _____

(ii) 'The cry of owl' is called ?



Ans. _____

(Spoken Expression-10)

A) Tick the correct answer :-

1x4=4

(i) **In the morning** _____ is used :-

- (a) Good morning! (b) Morning! (c) Very morning ! (d) Morning to you!

(ii) **For permission** _____ used .

- (a) Sir, I will come (b) May I come in sir /madam?
(c) Hello may come! (d) I am coming Sir.

(iii) **For** _____ used .



- (a) How much (b) How many (c) So many (d) How muches

iv) **Thank you = _____ ?**

- (a) Welcome! (b) Good bye!
(c) Morning! (d) None



B. Fill in the blanks with the correct answer :-

1x2 =2

(i) _____ ! Amal.(to talk over phone)

(ii) 'Good _____ ' (for night wish)

C. Do as directed

2x2=4

i) **Wish** your friend on his **birthday**

Ans. _____

(ii) **Wish** your miss in the **Evening**.

Ans. _____

GENERAL SCIENCE – 20

A) Tick the correct answers:-

1×6=6

i) What percentage of nitrogen consist in Earth's atmosphere ?

- a) 25% [] b) 12% [] c) 92% [] d) 78% []

ii) Deforestation generally increases .

- a) Rain fall [] b) Global warming [] c) Soil erosion [] d) All []

iii) Which part of our body help us to see things ?

- a) Ear [] b) Teeth [] c) Eyes [] d) Hands []

iv) Which of the following is an example of heathy food ?

- a) Fruits [] b) Rice [] c) Pizza [] d) Both a & b []

v) Which of the following protects us from cold ?

- a) Cotton Frock [] b) Sweater [] c) Rain coat [] d) All []

vi) Which is the hottest season in year ?

- a) Winter [] b) Autumn [] c) Summer [] d) Spring []

B) Answer in one or two words:

1×6=6

i) In which season does clothes dry the fastest ?

Ans:-

ii) The shape of earth is _____

iii) How many legs does a human body have ?

Ans:-

iv) Write the name of any one plant which grows on water ?

Ans:-

v) The water holding capacity is highest in which type of soil ?

Ans:-

vi) The Sun rises in the _____

C) Answer briefly in one or two sentences:

2×4=8

i) What is soil ?

Ans:-

ii) What do you understand by the term environment ?

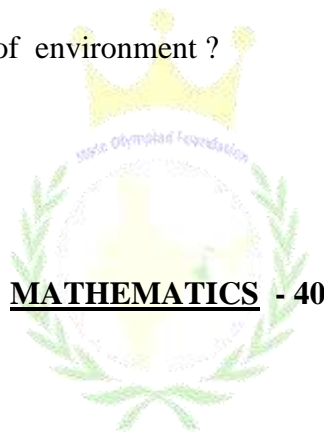
Ans:-

iii) Name two harmful pests ?

Ans:-

iv) What are the major components of environment ?

Ans:-



MATHEMATICS - 40

A) Choose the correct answer:-

1×14=14

i) 2 Hour = _____ Minute.

- a) 120 b) 60 c) 50 d) 40

ii) What is the name of seventh month of a year ?

- a) July b) August c) September d) June

iii) Complete the blank space by less than or greater than (< or >) symbol : 67 99

- a) < b) > c) ≤ d) ≥

iv) Arrange in ascending order : 79, 99, 59, 19.

- a) 19, 69, 99, 79 b) 19, 69, 79, 99
c) 19, 59, 79, 99 d) 91, 79, 69, 19

v) 42 is less than 49 .

- a) 6 b) 7 c) 8 d) 9

vi) 2685 - in this number , hundred place digit is ----

- a) 6 b) 8 c) 2 d) 5

vii) Half of 100 is ----

- a) 10 b) 50 c) 5 d) 25

viii) Place value of 2 in 421 is ----

- a) 200 b) 400 c) 20 d) 2

ix) Choose the correct number : $235 + 121 = ?$

- a) 366 b) 351 c) 356 d) 361

x) $\times 8 = 48$.

- a) 7 b) 9 c) 3 d) 6

xi) 1 fortnight = days.

- a) 15 b) 30 c) 7 d) None of these


xii) How many 2 rupee notes can be obtained by exchanging a 20 rupee note ?

- a) 10 b) 15 c) 5 d) None of these

xiii) $6 + 6 + 6 = 6 \times$ _____ .

- a) 1 b) 2 c) 3 d) 4

xiv) How many circle are there in the picture ?



- a) 3 b) 4 c) 5 d) 6

B) Answer the following questions :

2x7=14

i) Expand 621 in place value .

Ans:-

ii) Write down the number 257 by interchanging the digit of unit place and tens place .

Ans:-

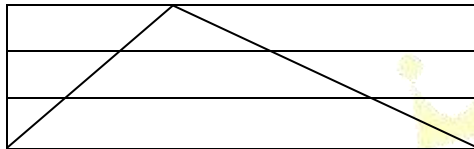
iii) $302 + 125 + 246 = \underline{\hspace{2cm}}$

Ans:-

iv)
$$\begin{array}{r} 425 \\ - \quad * * \\ \hline 344 \end{array}$$

Ans:-

v) In the adjoining figure , write down the number of triangles.



Ans:-

vi) Write Nine thousand Three hundred One in digit .

Ans:-

vii) If we subtract smallest four digit number from largest four digit number , what we will get ?

Ans:-

C) Answer the following questions :

3x4=12

i) A farmer sold spinach of Rs. 30 , brinjal of Rs. 90 and beans of Rs. 90 . How much money did he earn ?

ii) In a garden , each betel nut trees has 102 betel nuts . How many betel nuts are there in four trees in the garden ?

iii) $4 \times 5 = 5$ times of = + + + + +

Ans:-

iv) $395 \div 5 = ?$

For Rough Use



