

STATE OLYMPIAD COMBINED TEST-2024

ENGLISH VERSION

Question Paper Cum Answer Sheet



Full Marks:-

100 Marks

**CLASS
2**

Time:-

2 Hrs.

DATE:-...../...../ 2024

Name of Student:-.....

Class:- **Roll No:-**

Name of Centre:-.....

-:Instructions:-

- Write Roll Number clearly.
- Read the question paper carefully and answer.
- Give single (✓) mark on the correct answer only.
- Use only blue or black ball pen.

Subject	Marks Obtained
English	
Gen. Science	
Mathematics	
TOTAL	

Signature of Student

Signature of Examiner/s

Signature of Invigilator/s



ENGLISH - 40

(Grammar-20)

1) Tick the correct option to complete the following sentences:

1×8=8

i) Plural form of  'Shelf' is –

- a) Shelves [] b) Shelves [] c) Shelfes [] d) None of these []

ii) The verb after 'Shila' will be-


- a) is [] b) am [] c) being [] d) are []

iii) 'It' is a boy.' – The underlined word in the sentence is a –

- a) Noun [] b) Adverb [] c) Pronoun [] d) Adjective []

iv) The past form of the verb 'sing' is –

- a) Sang [] b) Sung [] c) Shang [] d) None of these []

v) The feminine gender of the word 'cow'  is –

- a) Ox [] b) Fecow [] c) Oxen [] d) None []

vi) 'It is _____ university of Burdwan'. 'the article in the blank will be –

- a) a [] b) an [] c) the [] d) None []

vii) 'I am going to school'. The sentence is written in –

- a) Present Continuous [] b) Past [] c) Perfect [] d) Future [] Tense

viii) 'We write _____  Pen. The preposition in the blank will be -

- a) with [] b) by [] c) to [] d) None []

2). Fill in the blanks with the correct verbs:

1x4 = 4

i) They _____ absent **yesterday**.


ii) All _____ present **today**.

iii) Babu _____ (come) just now.

iv) It _____ (rain) **today**.

3. Do as directed

2x4=8

i)  'Water' _____ kind of Noun ?

Ans. _____.

ii) What type of sentence is 'open the door please.'

Ans:- _____

iii) Add punctuation marks to the sentence & rewrite- 'how much is this pen'

Ans:- _____

iv) Write an example of 'strong verb'.



Ans: _____

(Vocabulary-10)

4) A. Choose the correct Answer :-

1x4 =4

i) The picture  is -

(a) potato

(b) papaiya

(c) gourd

(d) brinjal

(ii)

The  picture _____ ?

(a) Fruit

(b) Vegetables

(c) Pulse

(d) All of these

(iii) To sweep _____ is used .

(a) bucket

(b) broom

(c) dish

(d) bowl

(iv) The 'Vehicle' of desert' is ---

(a) Ship

(b) Dog

(c) Camel

(d) Horse

B. Fill in the blanks with the correct words :-

1x2 =2

(i) ERMAST : _____

(ii) BNAAAN : _____

C. Do as directed

2x2=4

(i) The babies of 'dog' is called ?

Ans. _____

(ii) 'The cry of lion' is called ?

Ans. _____

(Spoken Expression-10)

A) Tick the correct answer :-

1x4=4

(i) Morning=Good morning! Night = _____ ?

- (a) Sweet Night! (b) Good Night! (c) Very good Night ! (d) Night to you!

(ii) To give permission _____ used-

- (a) Sir, I will come (b) May I come in sir /madam?
(c) Hello may come! (d) You may go.

(iii) 'How much = Money , How long= _____ ?

- (a) Distance (b) Time (c) Counting (d) All of these.

iv) 'Have a good Day!' for = _____ ?

- (a) Evening! (b) Day!
(c) Morning! (d) All of these



B. Fill in the blanks with the correct answer :-

1x2 =2

(i) ' _____ ! This is Amal.' (to introduce)

(ii) ' _____ live long!' (for wish)

C. Do as directed

2x2=4

i)



Express the time in English.

Ans. _____

(ii) Friend: Do you have any pen?

Me: _____ ?

GENERAL SCIENCE – 20

A) Tick the correct answers:-

1x6 = 6

i) What part of tree remain under the ground –

- a) Leaf [] b) Root [] c) Fruit [] d) Seeds []

ii) _____ is a virus – causing disease ?

- a) Fever [] b) Thyroid [] c) Mums [] d) None []

iii) Among the following animals which one is the tallest ?

- a) Elephant [] b) Horse [] c) Giraffe [] d) Camel []

iv) Electric wire is covered with _____ .

- a) Plastic [] b) Copper [] c) Iron [] d) None of these []

v) On which element , animals are depended for food ?

- a) Tree [] b) Soil [] c) Water [] d) None of these []

vi) Solar energy is an example of _____ energy.

- a) Renewable [] b) None Renewable [] c) Natural [] d) None []

B) Answer the following questions briefly:-

1x6 = 6

i) Name some pollutants that cause environmental pollution .

Ans:-

ii) What is the source of energy in solar battery ?

Ans:-

iii) How many parts of the plants ? What are they ?

Ans:-

iv) Give one reason of noise pollution .

Ans:-

v) _____ Gas is used for respiration ?

vi) Name one air borne and one water borne diseases .

Ans:-

C) Answer the following questions :-

2x4 = 8

i) How clouds are created ?

Ans:-

ii) What is environmental pollution ?

Ans:-

iii) How many types of soil is found ? Write their names .

Ans:-



iv) What precautions should be taken when using electrical appliances ?

Ans:-

MATHEMATICS – 40

A) Choose the correct answers:-

1x14 = 14

i) Write the sum :

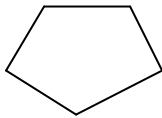
$$\begin{array}{c} \bigcirc \quad \bigcirc \\ \bigcirc \quad \bigcirc \quad \bigcirc \end{array} + \begin{array}{c} \bigcirc \quad \bigcirc \\ \bigcirc \end{array} = \underline{\hspace{2cm}}$$

- a) 10 b) 8 c) 9 d) 7

ii) Write the number in blank space : _____ + 6 = 9

- a) 1 b) 2 c) 3 d) 4

iii) How many sides in the figure ?

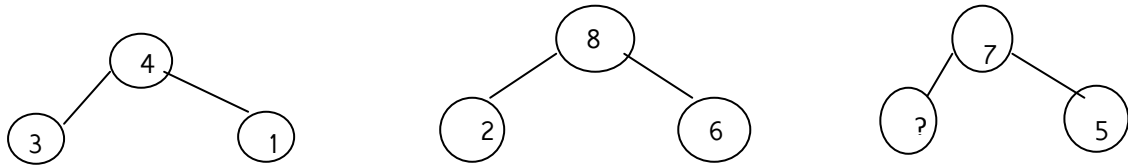


- a) 4 b) 5 c) 6 d) 7

iv) How many legs do 3 frog have ?

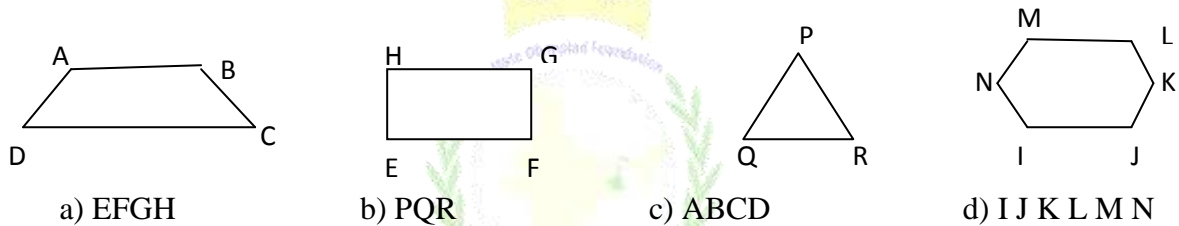
- a) 4 b) 6 c) 8 d) 12

v) Write the correct number in the blank space :



- a) 1 b) 2 c) 3 d) 4

vi) Which one is triangle ?



- a) EFGH b) PQR c) ABCD d) I J K L M N

vii) Which shape is it ?

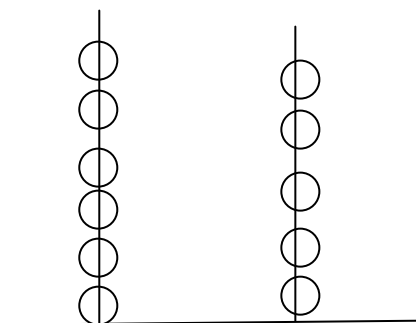


- a) triangle b) cylinder c) sphere d) square

viii) 5 more than 11 is _____ .

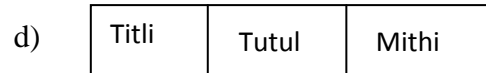

- a) 6 b) 55 c) 16 d) 15

ix) Which number is this in abacus ?



- a) 65 b) 64 c) 63 d) 56

x) In which picture , Mithi is sitting between Titli and Tutul ?



xi) Which one is arranged from largest to smallest ?

a) 10, 12, 15, 13

b) 10, 9, 8, 7

c) 10, 16, 17, 18

d) 20, 19, 17, 25

xii) $2 \times 10 + 18 \times 1 = ?$

a) 28

b) 38

c) 208

d) 218

xiii) Monti had 24 balls and she gave 2 balls to her sister. How many balls does Monti have now ?

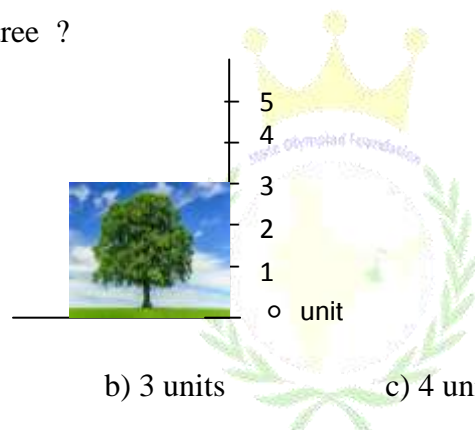
a) 22

b) 20

c) 18

d) 21

xv) How long is the tree ?



a) 2 units

b) 3 units

c) 4 units

d) 5 units

B) Answer the following questions :

2×7=14

i) Arrange in ascending order : 61, 63, 73, 88, 89

ii) $72 = \underline{\hspace{2cm}} \times 10 + \underline{\hspace{2cm}} \times 1$

iii) Circle the even numbers :

20, 25, 28, 31, 37, 59, 66, 88, 89

iv) Write the rank of the following months from first .

December _____

March _____

v) Fill in the blank space by a number :

20, 18, 16, 14, _____, 10, 8.

vi) Find out the largest and smallest number :

28, 75, 56, 18, 81

Largest _____

Smallest _____

vii) $26 + 0 =$ _____ ?

C) Answer the following questions :

3×4=12

i) Write in number : a) Five thousand five hundred sixty .

Ans:-

Write in words : b) 672490

Ans:-

ii) In the number 4567, what would be the place value / positional value of 4 and 6 .

iii) If , 60 min = 1 hour , then 1 day = _____ min .

iv) $77 \div 11 - 6 \times 4 + 3 = ?$



For Rough Use

